



Fill in the blanks to find the amounts.

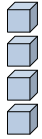
Answers

Ex)

1)

2)

Ex. 4



0

4

tens

ones

tens

ones

tens

ones

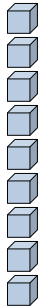
1. _____

2. _____

3. _____

4. _____

3)



4)



5)



tens

ones

tens

ones

tens

ones


5. _____

6. _____

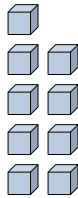
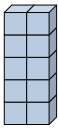
7. _____

8. _____

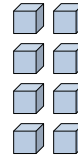
6)



7)



8)



tens

ones

tens

ones

tens

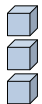
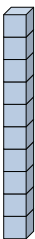
ones

9. _____

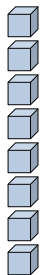
10. _____

11. _____

9)



10)



11)



tens

ones

tens

ones

tens

ones

